







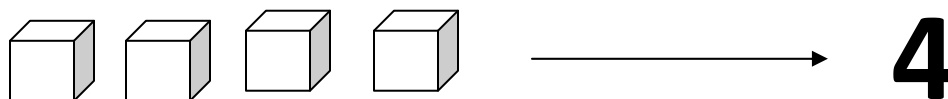
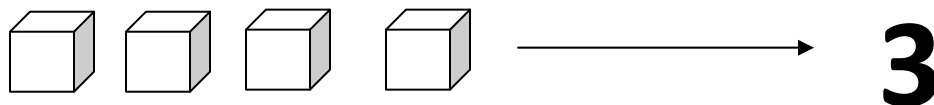
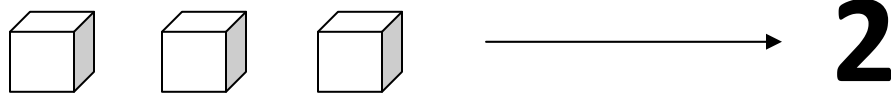
### Fișă de lucru – grupa mijlocie





1. Formează grupa steluțelor și grupa inimioarelor. Colorează grupa cu cele mai multe elemente.



2. Colorează atâtea cuburi câte îți indică cifra din dreapta.



3. Din câte dreptunghiuri este formată sperietoarea de ciori? Alege și colorează căsuța corectă.



2

3

4